



## Puzzle Time

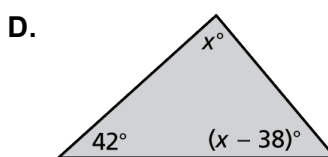
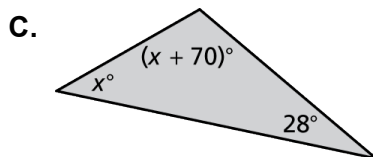
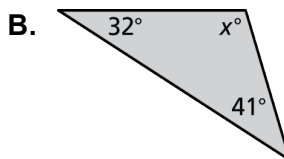
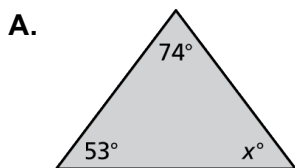
## Did You Hear The Story About The Piece Of Butter?

A	B	C	D	E	F
G	H	I			

Complete each exercise. Find the answer in the answer column. Write the word under the answer in the box containing the exercise letter.

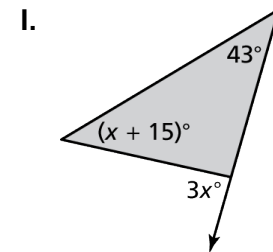
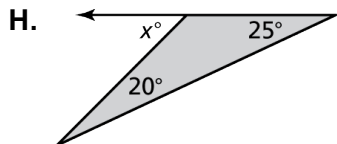
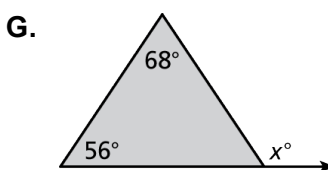
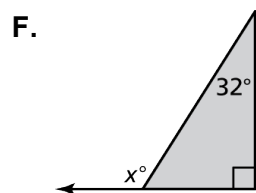
88° DON'T
144° TOAST
122° TO
53° NEVER
90° JELLY
45° IT

**Find the value of  $x$ .**



**E.** A triangle contains angles measuring  $25^\circ$  and  $75^\circ$ . What is the measure of the third angle?

**Find the measure of the exterior angle.**



107° MIND
124° SPREAD
60° WHEAT
87° AROUND
41° I
80° WANT